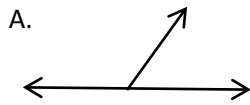


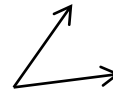
Vocabulary Matching G5.B, G5.C, G6.A

Match the vocabulary term with the correct diagram.

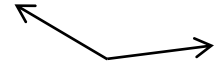
1. Acute Angle



B.



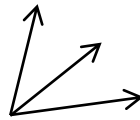
C.



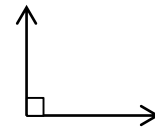
2. Obtuse Angle

3. Straight Angle

D.



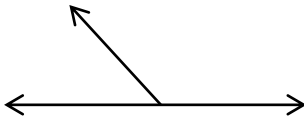
E.



4. Linear Pair

Choose the term that best describes the following diagrams.

5.



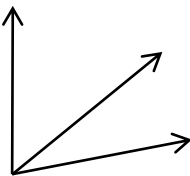
A. Complementary Angles

B. Vertical Angles

C. Supplementary Angles

D. Congruent Angles.

6.



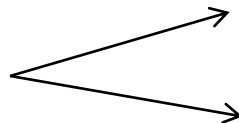
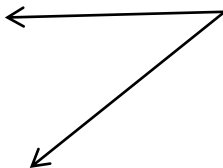
A. Linear Pair

B. Adjacent Angles

C. Obtuse Angles

D. Vertical Angles

7.



A. Congruent Angles

B. Supplementary Angles

C. Adjacent Angles

D. Complementary Angles